



FINAL JEE–MAIN EXAMINATION – JANUARY, 2023
Held On Sunday 29th January, 2023
TIME : 3 : 00 PM to 6 : 00 PM

SECTION-A

1. Substance A has atomic mass number 16 and half life of 1 day. Another substance B has atomic mass number 32 and half life of $\frac{1}{2}$ day. If both A and B simultaneously start undergo radio activity at the same time with initial mass 320 g each, how many total atoms of A and B combined would be left after 2 days.

- (1) 3.38×10^{24} (2) 6.76×10^{24}
 (3) 6.76×10^{23} (4) 1.69×10^{24}

Official Ans. by NTA (1)

Ans. (1)

Sol. $(N_0)A = \frac{320}{16} = 20$ moles

$(N_0)B = \frac{320}{32} = 10$ moles

$N_A = \frac{(N_0)_A}{(2)^{2/1}} = \frac{20}{4} = 5$

$N_B = \frac{(N_0)_B}{(2)^{2/0.5}} = \frac{10}{2^4} = 0.625$

Total N = 5.625

No. of atoms = $5.625 \times 6.023 \times 10^{23}$
 $= 3.38 \times 10^{24}$

Ans. (1)

2. At 300 K, the rms speed of oxygen molecules is

$\sqrt{\frac{\alpha + 5}{\alpha}}$ times to that of its average speed in the

gas. Then, the value of α will be (used $\pi = \frac{22}{7}$)

- (1) 32 (2) 28
 (3) 24 (4) 27

Official Ans. by NTA (2)

Ans. (2)

Sol. $\sqrt{\frac{3RT}{M}} = \sqrt{\frac{\alpha + 5}{\alpha}} \sqrt{\frac{8 RT}{\pi M}}$

$3 = \frac{\alpha + 5}{\alpha} \frac{8}{\pi}$

$\alpha = 28$

Ans. 2

3. The ratio of de-Broglie wavelength of an α -particle and a proton accelerated from rest by the same potential is $\frac{1}{\sqrt{m}}$, the value of m is

- (1) 4 (2) 16
 (3) 8 (4) 2

Official Ans. by NTA (3)

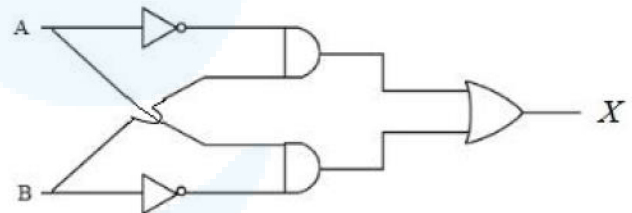
Ans. (3)

Sol. $\frac{\lambda_\alpha}{\lambda_p} = \frac{h}{\frac{\sqrt{2m_\alpha q_\alpha V}}{h}} = \frac{h}{\sqrt{2m_p q_p V}}$

$\frac{\lambda_\alpha}{\lambda_p} = \sqrt{\frac{1}{8}} \quad m = 8$

Ans. 3

4. For the given logic gates combination, the correct truth table will be



(1)

A	B	X
0	0	1
0	1	0
1	0	0
1	1	0

(2)

A	B	X
0	0	0
0	1	1
1	0	1
1	1	0

(3)

A	B	X
0	0	1
0	1	0
1	0	1
1	1	0

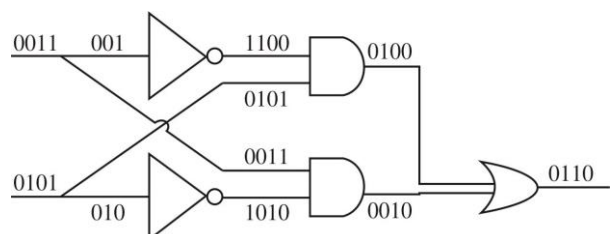
(4)

A	B	X
0	0	0
0	1	1
1	0	1
1	1	1

Official Ans. by NTA (2)

Ans. (2)

Sol.





5. The time taken by an object to slide down 45° rough inclined plane is n times as it takes to slide down a perfectly smooth 45° incline plane. The coefficient of kinetic friction between the object and the incline plane is

- (1) $\sqrt{\frac{1}{1-n^2}}$ (2) $\sqrt{1-\frac{1}{n^2}}$
 (3) $1+\frac{1}{n^2}$ (4) $1-\frac{1}{n^2}$

Official Ans. by NTA (4)

Ans. (4)

Sol. $a_1 = g \sin \theta = g / \sqrt{2}$

$$a_2 = g \sin \theta - K g \cos \theta = \frac{g}{\sqrt{2}} - \frac{K g}{\sqrt{2}}$$

$$t_2 = n t_1 \quad \& \quad a_1 t_1^2 = a_2 t_2^2$$

$$\frac{g}{\sqrt{2}} t_1^2 = \left(\frac{g}{\sqrt{2}} - \frac{K g}{\sqrt{2}} \right) n^2 t_1^2$$

$$K = 1 - \frac{1}{n^2} \quad \text{Ans. 4}$$

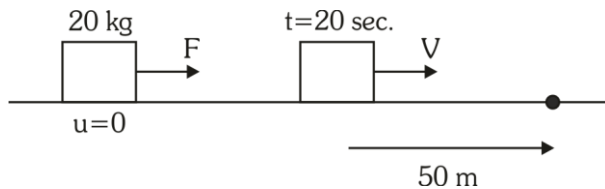
6. Force acts for 20 s on a body of mass 20 kg, starting from rest, after which the force ceases and then body describes 50 m in the next 10 s. The value of force will be :

- (1) 40 N (2) 5 N
 (3) 20 N (4) 10 N

Official Ans. by NTA (2)

Ans. (2)

Sol.



$$50 = V \times 10$$

$$V = 5 \text{ m/s}$$

$$V = 0 + a \times 20$$

$$5 = a \times 20$$

$$a = \frac{1}{4} \text{ m/s}^2$$

$$F = ma = 20 \times \frac{1}{4} = 5 \text{ N}$$

7. A fully loaded boeing aircraft has a mass of 5.4×10^5 kg. Its total wing area is 500 m^2 . It is in level flight with a speed of 1080 km/h. If the density of air ρ is 1.2 kg m^{-3} , the fractional increase in the speed of the air on the upper surface of the wing relative to the lower surface in percentage will be ($g = 10 \text{ m/s}^2$)

- (1) 16 (2) 6
 (3) 8 (4) 10

Official Ans. by NTA (4)

Ans. (4)

Sol. $P_2 A - P_1 A = 5.4 \times 10^5 \times g$

$$P_2 - P_1 = \frac{5.4 \times 10^6}{500} = 5.4 \times 2 \times 10^2 \times 10 = 10.8 \times 10^3$$

$$P_2 + 0 + \frac{1}{2} \rho V_2^2 = P_1 + 0 + \frac{1}{2} \rho V_1^2$$

$$P_2 - P_1 = \frac{1}{2} \rho (V_1^2 - V_2^2) = \frac{1}{2} \rho (V_1 - V_2)(V_1 + V_2)$$

$$10.8 \times 10^3 = \frac{1}{2} \times 1.2 (V_1 - V_2) \times 2 \times 3 \times 10^2$$

$$10.8 \times 10 = 3.6 (V_1 - V_2)$$

$$V_1 - V_2 = 30$$

$$\left(\frac{V_1 - V_2}{V} \right) \times 100 = \frac{30}{300} \times 100 = 10\%$$

8. Identify the correct statements from the following:
- (A) Work done by a man in lifting a bucket out of a well by means of a rope tied to the bucket is negative.
 - (B) Work done by gravitational force in lifting a bucket out of a well by a rope tied to the bucket is negative.
 - (C) Work done by friction on a body sliding down an inclined plane is positive.
 - (D) Work done by an applied force on a body moving on a rough horizontal plane with uniform velocity is zero.
 - (E) Work done by the air resistance on an oscillating pendulum is negative.

Choose the correct answer from the options given below:

- (1) B and E only (2) A and C only
 (3) B, D and E only (4) B and D only

Official Ans. by NTA (1)

Ans. (1)



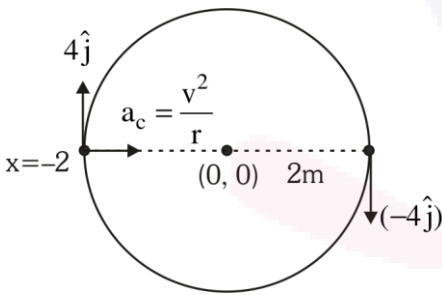
9. An object moves at a constant speed along a circular path in a horizontal plane with centre at the origin. When the object is at $x = +2\text{m}$, its velocity is $-4\hat{j} \text{ m/s}$. The object's velocity (v) and acceleration (a) at $x = -2 \text{ m}$ will be

- (1) $v = 4\hat{i} \text{ m/s}$, $a = 8\hat{j} \text{ m/s}^2$
- (2) $v = 4\hat{j} \text{ m/s}$, $a = 8\hat{i} \text{ m/s}^2$
- (3) $v = -4\hat{j} \text{ m/s}$, $a = 8\hat{i} \text{ m/s}^2$
- (4) $v = -4\hat{i} \text{ m/s}$, $a = -8\hat{j} \text{ m/s}^2$

Official Ans. by NTA (2)

Ans. (2)

Sol.



$$a_c = \frac{V^2}{r} = \frac{4^2}{2} = \frac{16}{2} = 8 \text{ m/s}^2$$

$$\vec{V} = 4\hat{j}$$

$$\vec{a} = 8\hat{i}$$

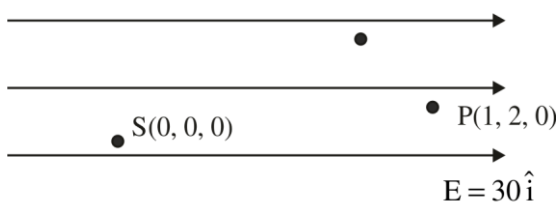
10. A point charge $2 \times 10^{-2} \text{ C}$ is moved from P to S in a uniform electric field of 30 NC^{-1} directed along positive x-axis. If coordinates of P and S are (1, 2, 0) m and (0, 0, 0) m respectively, the work done by electric field will be

- (1) 1200 mJ
- (2) 600 mJ
- (3) -600 mJ
- (4) -1200 mJ

Official Ans. by NTA (3)

Ans. (3)

Sol.



$$\begin{aligned} \omega_E &= q \vec{E} \cdot \vec{S} \\ &= 2 \times 10^{-2} [30\hat{i} \cdot (-\hat{i})] \\ &= 2 \times 10^{-2} (-30) \\ &= -60 \times 10^{-2} \\ &= -\frac{60}{100} = -0.6\text{J} \\ &= -600 \text{ mJ} \end{aligned}$$

11. The modulation index for an A.M. wave having maximum and minimum peak to peak voltages of 14 mV and 6 mV respectively is :

- (1) 1.4
- (2) 0.4
- (3) 0.2
- (4) 0.6

Official Ans. by NTA (2)

Ans. (2)

Sol. $\mu = \text{modulation index} = \frac{A_{\max} - A_{\min}}{A_{\max} + A_{\min}}$

$$= \frac{14 - 6}{14 + 6} = 0.4$$

12. The electric current in a circular coil of four turns produces a magnetic induction 32 T at its centre. The coil is unwound and is rewound into a circular coil of single turn, the magnetic induction at the centre of the coil by the same current will be :

- (1) 8T
- (2) 4T
- (3) 2T
- (4) 16T

Official Ans. by NTA (3)

Ans. (3)

Sol. $B = \frac{\mu_0 i}{2R} \times 4$

$$B' = \frac{\mu_0 i}{2R'}$$

$$R' = 4R$$

$$B' = \frac{\mu_0 i}{8R}$$

$$\frac{B'}{B} = \frac{1}{16}$$

$$B' = 2\text{T}$$



13. With the help of potentiometer, we can determine the value of emf of a given cell. The sensitivity of the potentiometer is
- (A) directly proportional to the length of the potentiometer wire
 - (B) directly proportional to the potential gradient of the wire
 - (C) inversely proportional to the potential gradient of the wire
 - (D) inversely proportional to the length of the potentiometer wire

Choose the correct option for the above statements:

- (1) B and D only (2) A and C only
- (3) A only (4) C only

Official Ans. by NTA (2)

Ans. (2)

Sol. Sensitivity of potentiometer wire is inversely proportional to potential gradient.

14. A scientist is observing a bacteria through a compound microscope. For better analysis and to improve its resolving power he should. (Select the best option)

- (1) Increase the wave length of the light
- (2) Increase the refractive index of the medium between the object and objective lens
- (3) Decrease the focal length of the eye piece
- (4) Decrease the diameter of the objective lens

Official Ans. by NTA (2)

Ans. (2)

Sol.
$$P = \frac{2\mu \sin \theta}{1.22\lambda}$$

15. Given below are two statements:

Statement I : Electromagnetic waves are not deflected by electric and magnetic field.

Statement II : The amplitude of electric field and the magnetic field in electromagnetic waves are

related to each other as
$$E_0 = \sqrt{\frac{\mu_0}{\epsilon_0}} B_0$$

In the light of the above statements, choose the correct answer from the options given below:

- (1) Statement I is true but statement II is false
- (2) Both Statement I and Statement II are true
- (3) Statement I is false but statement II is true
- (4) Both Statement I and Statement II are false

Official Ans. by NTA (1)

Ans. (1)

Sol. Statement-I is correct as EMW are neutral.

Statement-II is wrong.

$$E_0 = \sqrt{\frac{1}{\mu_0 \epsilon_0}} B_0$$

16. Heat energy of 184 kJ is given to ice of mass 600 g at -12°C , Specific heat of ice is $2222.3 \text{ J kg}^{-1} \text{ }^\circ\text{C}^{-1}$ and latent heat of ice in 336 kJ/kg^{-1}

- (A) Final temperature of system will be 0°C .
- (B) Final temperature of the system will be greater than 0°C .
- (C) The final system will have a mixture of ice and water in the ratio of 5 : 1.
- (D) The final system will have a mixture of ice and water in the ratio of 1 : 5.
- (E) The final system will have water only.

Choose the correct answer from the options given below:

- (1) A and D only (2) B and D only
- (2) A and E only (4) A and C only

Official Ans. by NTA (1)

Ans. (1)

Sol. $\Delta Q = 184 \times 10^3$
 $m = 0.600 \text{ kg at } -12^\circ\text{C}$

$S = 222.3 \text{ J/kg}^\circ\text{C}$

$L = 336 \times 10^3 \text{ J/kg}$

$Q_1 = 0.600 \times 2222.3 \times 12 = 16000.56 \text{ J}$

Remaining heat $\Delta Q_1 = 184000 - 16000.56$
 $= 167999.44 \text{ J}$

For meeting at 0°C

$\Delta Q_2 = 0.600 \times 336000 = 201600 \text{ J needed}$

\therefore 100% ice is not melted

Amount of ice melted

$167999.44 = m \times 336000 = 0.4999 \text{ kg}$

\therefore mass of water = 0.4999 kg

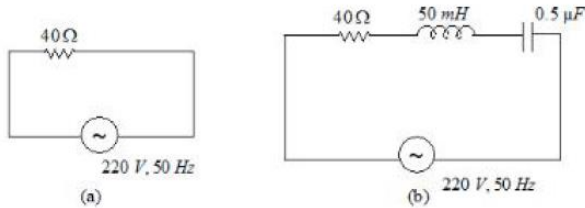
Mass of ice = 0.1001

\therefore Ratio = $\frac{0.1001}{0.4999} \approx 1 : 5$

Correct Ans (1) : A and D only



17. For the given figures, choose the correct options:

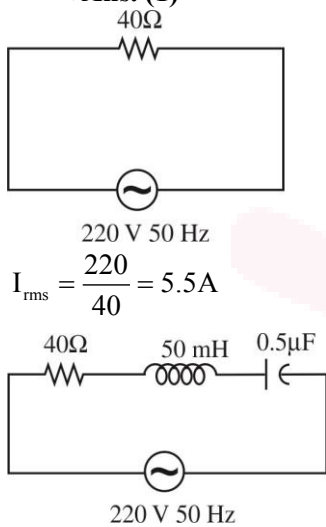


- (1) The rms current in circuit (b) can never be larger than that in (a)
- (2) The rms current in figure (a) is always equal to that in figure (b)
- (3) The rms current in circuit (b) can be larger than that in (a)
- (4) At resonance, current in (b) is less than that in (a)

Official Ans. by NTA (1)

Ans. (1)

Sol.



X_L is not equal to X_C . So rms current in (b) can never be larger than (a).

18. The time period of a satellite of earth is 24 hours. If the separation between the earth and the satellite is decreased to one fourth of the previous value, then its new time period will become.

- (1) 4 hours
- (2) 6 hours
- (3) 12 hours
- (4) 3 hours

Official Ans. by NTA (4)

Ans. (4)

Sol. $T^2 \propto R^3$

$$\frac{T_1^2}{T_2^2} = \frac{R_1^3}{R_2^3} \Rightarrow \left(\frac{T_1}{T_2}\right)^2 = \left(\frac{R}{\frac{R}{4}}\right)^3$$

$$\therefore \frac{T_1^2}{T_2^2} = 64$$

$$\therefore T_2^2 = \frac{T_1^2}{64}$$

$$\therefore T_2 = \frac{24}{8} = 3$$

19. The equation of a circle is given by $x^2 + y^2 = a^2$, where a is the radius. If the equation is modified to change the origin other than $(0, 0)$, then find out the correct dimensions of A and B in a new equation :

$$(x - At)^2 + \left(y - \frac{t}{B}\right)^2 = a^2.$$

The dimensions of t is given as $[T^{-1}]$.

- (1) $A = [L^{-1} T]$, $B = [LT^{-1}]$
- (2) $A = [LT]$, $B = [L^{-1}T^{-1}]$
- (3) $A = [L^{-1}T^{-1}]$, $B = [LT^{-1}]$
- (4) $A = [L^{-1}T^{-1}]$, $B = [LT]$

Official Ans. by NTA (2)

Ans. (2)

Sol. $(x - At)^2 + \left(y - \frac{t}{B}\right)^2 = a^2$

$$[At] = A \times \frac{1}{T} = L$$

$$\therefore [A] = T^1 L^1$$

$$\frac{t}{B} \text{ is in meters}$$

$$\therefore \frac{1}{T[B]} = L$$

$$\therefore [B] = T^{-1} L^{-1}$$

Correct Ans. (2)

20. A square loop of area 25cm^2 has a resistance of 10Ω . The loop is placed in uniform magnetic field of magnitude 40.0 T . The plane of loop is perpendicular to the magnetic field. The work done in pulling the loop out of the magnetic field slowly and uniformly in 1.0 sec , will be

- (1) $2.5 \times 10^{-3}\text{ J}$
- (2) $1.0 \times 10^{-3}\text{ J}$
- (3) $1.0 \times 10^{-4}\text{ J}$
- (4) $5 \times 10^{-3}\text{ J}$

Official Ans. by NTA (2)

Ans. (2)

Sol. $\ell = 50\text{ cm}$

$t = 1\text{ sec}$

$$\therefore v = \frac{0.05}{1} = 0.05\text{ m/s.}$$

$$i = \frac{40 \times 0.05 \times 0.05}{10} = 0.01\text{ A}$$

$$\therefore F = B_i \ell = 40 \times 0.01 \times 0.05$$

$$F = 0.02\text{ N}$$

$$\therefore W = 0.02 \times \ell = 0.02 \times .05$$

$$\therefore W = 1 \times 10^{-3}\text{ J}$$



SECTION-B

21. When two resistance R_1 and R_2 connected in series and introduced into the left gap of a meter bridge and a resistance of 10Ω is introduced into the right gap, a null point is found at 60 cm from left side. When R_1 and R_2 are connected in parallel and introduced into the left gap, a resistance of 3Ω is introduced into the right-gap to get null point at 40 cm from left end. The product of $R_1 R_2$ is _____ Ω^2

Official Ans. by NTA (30)

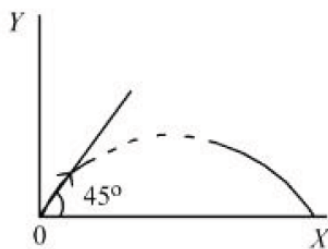
Ans. (30)

Sol. $\frac{R_1 + R_2}{10} = \frac{60}{40} = \frac{3}{2} \Rightarrow R_1 + R_2 = 15$

Now $\frac{R_1 R_2}{(R_1 + R_2) \times 3} = \frac{40}{60} = \frac{2}{3} \Rightarrow R_1 R_2 = 30$

22. A particle of mass 100 g is projected at time $t = 0$ with a speed 20 ms^{-1} at an angle 45° to the horizontal as given in the figure. The magnitude of the angular momentum of the particle about the starting point at time $t = 2\text{s}$ is found to be $\sqrt{K} \text{ kg m}^2 / \text{s}$. The value of K is _____.

(Take $g = 10 \text{ ms}^{-2}$)



Official Ans. by NTA (800)

Ans. (800)

Sol. Use $\Delta L = \int_0^t \tau dt$

$L_0 = \int_0^2 mg(v_x t) dt$

$= mg v_x \frac{t^2}{2} = (0.1)(10)(10\sqrt{2}) \frac{2^2}{2}$

$= 20\sqrt{2}$

$= \sqrt{800} \text{ kg m}^2 / \text{s}$

23. In an experiment of measuring the refractive index of a glass slab using travelling microscope in physics lab, a student measures real thickness of the glass slab as 5.25 mm and apparent thickness of the glass slab at 5.00 mm. Travelling microscope has 20 divisions in one cm on main scale and 50 divisions on Vernier scale is equal to 49 divisions on main scale. The estimated uncertainty in the measurement of refractive index of the slab is $\frac{x}{10} \times 10^{-3}$, where x is _____

Official Ans. by NTA (41)

Ans. (41)

Sol. $u = \frac{h}{h'} = \frac{5.25}{5.00}$

Least count = $\frac{1}{20} \text{ cm} - \frac{49}{50} \cdot \frac{1}{20} \text{ cm}$

$= \frac{1}{50} \times \frac{1}{20} \text{ cm} = 0.01 \text{ mm}$

$\ln u = \ln h - \ln h'$

$\frac{du}{u} = \frac{dh}{h} - \frac{dh'}{h'}$

$du = \left[\frac{0.01}{5.25} + \frac{0.01}{5.00} \right] \frac{5.25}{5.00}$

$= \frac{41}{10} \times 10^{-3}$

Ans. = 41

24. For a charged spherical ball, electrostatic potential inside the ball varies with r as $V = 2ar^2 + b$. Here, a and b are constant and r is the distance from the center. The volume charge density inside the ball is $-\lambda a \epsilon$. The value of λ is _____.

$\epsilon =$ permittivity of medium.

Official Ans. by NTA (12)

Ans. (12)

Sol. $E = -\frac{dV}{dr} = -4ar \equiv \frac{\rho r}{3\epsilon_0}$ (compare)

Result inside uniformly charged solid sphere.

$\rho = -12a\epsilon_0$

$$\lambda = 12$$

25. A car is moving on a circular path of radius 600 m such that the magnitudes of the tangential acceleration and centripetal acceleration are equal. The time taken by the car to complete first quarter of revolution, if it is moving with an initial speed of 54 km/hr is $t(1 - e^{-\pi/2})$ s. The value of t is _____.

Official Ans. by NTA (40)

Ans. (40)

Sol.
$$v \frac{dv}{dx} = \frac{v^2}{R} \Rightarrow \int_{15}^v \frac{dv}{v} = \frac{1}{R} \int_0^x dx$$

$$v = 15e^{x/R}$$

$$\frac{dx}{dt} = 15e^{x/R}$$

$$\frac{\pi R}{2} \int_0^{t_0} e^{-x/R} dx = 15 \int_0^{t_0} dt$$

$$t_0 = 40(1 - e^{-\pi/2})$$

26. An inductor of inductance 2 μ H is connected in series with a resistance, a variable capacitor and an AC source of frequency 7 kHz. The value of capacitance for which maximum current is drawn into the circuit is $\frac{1}{x}$ F, where the value of x is _____.

(Take $\pi = \frac{22}{7}$)

Official Ans. by NTA (3872)

Ans. (3872)

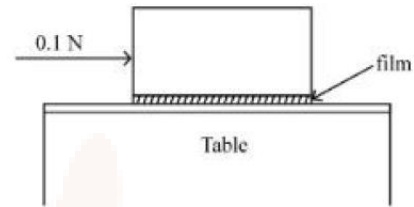
Sol.
$$\frac{1}{2\pi fC} = 2\pi fL$$

$$C = \frac{1}{4\pi^2 f^2 L} = \frac{1}{4 \times \pi^2 \times 49 \times 10^6 \times 2 \times 10^{-6}}$$

$$C = \frac{1}{3872} \text{ F}$$

$x = 3872$ **Ans.**

27. A metal block of base area 0.20 m^2 is placed on a table, as shown in figure. A liquid film of thickness 0.25 mm is inserted between the block and the table. The block is pushed by a horizontal force of 0.1 N and moves with a constant speed. If the viscosity of the liquid is 5.0×10^{-3} Pl, the speed of block is _____ $\times 10^{-3}$ m/s.



Official Ans. by NTA (25)

Ans. (25)

Sol.
$$|F| = \eta A \frac{\Delta v}{\Delta h} : 0.1 = 5 \times 10^{-3} \times 0.2 \times \frac{v}{.25 \times 10^{-3}}$$

$$v = 0.025 \text{ m/s or } v = 25 \times 10^{-3} \text{ m/s}$$

28. A particle of mass 250 g executes a simple harmonic motion under a periodic force $F = (-25x)$ N. The particle attains a maximum speed of 4m/s during its oscillation. The amplitude of the motion is _____ cm.

Official Ans. by NTA (40)

Ans. (40)

Sol.
$$\frac{1}{4}a = -25x \quad ; \quad a = -100x$$

$$\omega^2 = 100 \quad \omega = 10,$$

$$\omega A = 4 \quad A = \frac{4}{10} = 0.4 \text{ m}$$

$$A = 40 \text{ cm}$$

29. Unpolarised light is incident on the boundary between two dielectric media, whose dielectric constants are 2.8 (medium -1) and 6.8 (medium - 2), respectively. To satisfy the condition, so that the reflected and refracted rays are perpendicular to each other, the angle of incidence should be

$$\tan^{-1} \left(1 + \frac{10}{\theta} \right)^{\frac{1}{2}} \text{ the value of } \theta \text{ is } \underline{\hspace{2cm}}.$$

(Given for dielectric media, $\mu_r = 1$)

Official Ans. by NTA (7)

Ans. (7)



Sol. $\mu_1 = \sqrt{2.8 \times 1} = \sqrt{2.8}$

$$\mu_2 = \sqrt{6.8 \times 1} = \sqrt{6.8}$$

$$\mu_1 \sin i = \mu_2 \cos i \quad \tan i = \frac{\mu_2}{\mu_1} = \sqrt{\frac{6.8}{2.8}}$$

$$\tan i = \left(\frac{2.8+4}{2.8}\right)^{1/2} \quad i = \tan^{-1}\left(1 + \frac{10}{7}\right)^{1/2}$$

$\theta = 7$ Ans.

- 30.** A null point is found at 200 cm in potentiometer when cell in secondary circuit is shunted by 5Ω . When a resistance of 15Ω is used for shunting null point moves to 300 cm. The internal resistance of the cell is _____ Ω .

Official Ans. by NTA (5)

Ans. (5)

Sol. $\frac{\varepsilon}{r+5} \times 5 = 200x \quad \dots(1)$

$$\frac{\varepsilon \times 15}{r+15} = 300x \quad \dots(2)$$

$$\Rightarrow r = 5\Omega$$

Ans. 5