



FINAL JEE–MAIN EXAMINATION – JANUARY, 2023
Held On Wednesday 1st February, 2023
TIME : 09:00 AM to 12:00 PM

SECTION-A

61. $\lim_{n \rightarrow \infty} \left(\frac{1}{1+n} + \frac{1}{2+n} + \frac{1}{3+n} + \dots + \frac{1}{2n} \right)$ is equal to :-
 (1) 0 (2) $\log_e 2$
 (3) $\log_e \left(\frac{3}{2} \right)$ (4) $\log_e \left(\frac{2}{3} \right)$

Official Ans. by NTA (2)

Ans. (2)

Sol. $\lim_{n \rightarrow \infty} \left(\frac{1}{1+n} + \dots + \frac{1}{n+n} \right) = \lim_{n \rightarrow \infty} \sum_{r=1}^n \frac{1}{n+r}$
 $= \lim_{n \rightarrow \infty} \sum_{r=1}^n \frac{1}{n} \left(\frac{1}{1+\frac{r}{n}} \right)$
 $= \int_0^1 \frac{1}{1+x} dx = [\ln(1+x)]_0^1 = \ln 2$

62. The negation of the expression $q \vee ((\sim q) \wedge p)$ is equivalent to
 (1) $(\sim p) \wedge (\sim q)$ (2) $p \wedge (\sim q)$
 (3) $(\sim p) \vee (\sim q)$ (4) $(\sim p) \vee q$

Official Ans. by NTA (1)

Ans. (1)

Sol. $\sim (q \vee ((\sim q) \wedge p))$
 $= \sim q \wedge \sim ((\sim q) \wedge p)$
 $= \sim q \wedge (q \vee \sim p)$
 $= (\sim q \wedge q) \vee (\sim q \wedge \sim p)$
 $= (\sim q \wedge \sim p)$

63. In a binomial distribution $B(n, p)$, the sum and product of the mean & variance are 5 and 6 respectively, then find $6(n + p - q)$ is equal to :-
 (1) 51
 (2) 52
 (3) 53
 (4) 50

Official Ans. by NTA (2)

Ans. (2)

Sol. $np + npq = 5, np \cdot npq = 6$
 $np(1+q) = 5, n^2p^2q = 6$
 $n^2p^2(1+q)^2 = 25, n^2p^2q = 6$

$\frac{6}{q} (1+q)^2 = 25$

$6q^2 + 12q + 6 = 25q$

$6q^2 - 13q + 6 = 0$

$6q^2 - 9q - 4q + 6 = 0$

$(3q-2)(2q-3) = 0$

$q = \frac{2}{3}, \frac{3}{2}, q = \frac{2}{3}$ is accepted

$p = \frac{1}{3} \Rightarrow n \cdot \frac{1}{3} + n \cdot \frac{1}{3} \cdot \frac{2}{3} = 5$

$\frac{3n+2n}{9} = 5$

$n = 9$

So $6(n+p-q) = 6 \left(9 + \frac{1}{3} - \frac{2}{3} \right) = 52$

64. The sum to 10 terms of the series

$\frac{1}{1+1^2+1^4} + \frac{2}{1+2^2+2^4} + \frac{3}{1+3^2+3^4} + \dots$ is:-

(1) $\frac{59}{111}$ (2) $\frac{55}{111}$

(3) $\frac{56}{111}$ (4) $\frac{58}{111}$

Official Ans. by NTA (2)

Ans. (2)

Sol. $T_r = \frac{(r^2+r+1) - (r^2-r+1)}{2(r^4+r^2+1)}$

$\Rightarrow T_r = \frac{1}{2} \left[\frac{1}{r^2-r+1} - \frac{1}{r^2+r+1} \right]$

$T_1 = \frac{1}{2} \left[\frac{1}{1} - \frac{1}{3} \right]$

$T_2 = \frac{1}{2} \left[\frac{1}{3} - \frac{1}{7} \right]$



$$T_3 = \frac{1}{2} \left[\frac{1}{7} - \frac{1}{13} \right]$$

$$\vdots$$

$$T_{10} = \frac{1}{2} \left[\frac{1}{91} - \frac{1}{111} \right]$$

$$\Rightarrow \sum_{r=1}^{10} T_r = \frac{1}{2} \left[1 - \frac{1}{111} \right] = \frac{55}{111}$$

65. The value of

$$\frac{1}{1!50!} + \frac{1}{3!48!} + \frac{1}{5!46!} + \dots + \frac{1}{49!2!} + \frac{1}{51!1!}$$

- (1) $\frac{2^{50}}{50!}$ (2) $\frac{2^{50}}{51!}$
 (3) $\frac{2^{51}}{51!}$ (4) $\frac{2^{51}}{50!}$

Official Ans. by NTA (2)

Ans. (2)

Sol.
$$\sum_{r=1}^{26} \frac{1}{(2r-1)!(51-(2r-1))!} = \sum_{r=1}^{26} {}^{51}C_{(2r-1)} \frac{1}{51!}$$

$$= \frac{1}{51!} \{ {}^{51}C_1 + {}^{51}C_3 + \dots + {}^{51}C_{51} \} = \frac{1}{51!} (2^{50})$$

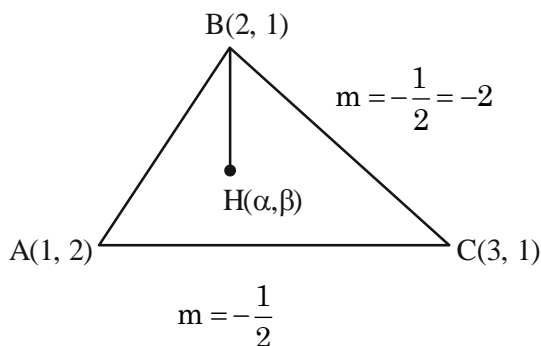
66. If the orthocentre of the triangle, whose vertices are (1, 2), (2, 3) and (3, 1) is (α, β), then the quadratic equation whose roots are α + 4β and 4α + β, is

- (1) $x^2 - 19x + 90 = 0$
 (2) $x^2 - 18x + 80 = 0$
 (3) $x^2 - 22x + 120 = 0$
 (4) $x^2 - 20x + 99 = 0$

Official Ans. by NTA (4)

Ans. (4)

Sol.



Here $m_{BH} \times m_{AC} = -1$

$$\left(\frac{\beta - 3}{\alpha - 2} \right) \left(\frac{1}{-2} \right) = -1$$

$$\beta - 3 = 2\alpha - 4$$

$$\beta = 2\alpha - 1$$

$$m_{AH} \times m_{BC} = -1$$

$$\Rightarrow \left(\frac{\beta - 2}{\alpha - 1} \right) (-2) = -1$$

$$\Rightarrow 2\beta - 4 = \alpha - 1$$

$$\Rightarrow 2(2\alpha - 1) = \alpha + 3$$

$$\Rightarrow 3\alpha = 5$$

$$\alpha = \frac{5}{3}, \beta = \frac{7}{3} \Rightarrow H \left(\frac{5}{3}, \frac{7}{3} \right)$$

$$\alpha + 4\beta = \frac{5}{3} + \frac{28}{3} = \frac{33}{3} = 11$$

$$\beta + 4\alpha = \frac{7}{3} + \frac{20}{3} = \frac{27}{3} = 9$$

$$x^2 - 20x + 99 = 0$$

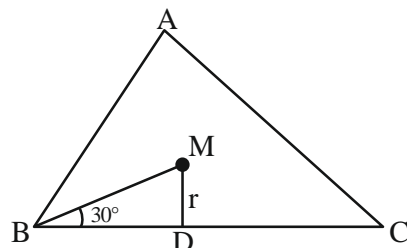
67. For a triangle ABC, the value of $\cos 2A + \cos 2B + \cos 2C$ is least. If its inradius is 3 and incentre is M, then which of the following is NOT correct?

- (1) Perimeter of ΔABC is $18\sqrt{3}$
 (2) $\sin 2A + \sin 2B + \sin 2C = \sin A + \sin B + \sin C$
 (3) $\vec{MA} \cdot \vec{MB} = -18$
 (4) area of ΔABC is $\frac{27\sqrt{3}}{2}$

Official Ans. by NTA (4)

Ans. (4)

Sol.



If $\cos 2A + \cos 2B + \cos 2C$ is minimum then $A = B = C = 60^\circ$

So ΔABC is equilateral

Now in-radius $r = 3$

So in ΔMBD we have



$$\tan 30^\circ = \frac{MD}{BD} = \frac{r}{a/2} = \frac{6}{a}$$

$$1/\sqrt{3} = \frac{1}{a} = a = 6\sqrt{3}$$

$$\text{Perimeter of } \Delta ABC = 18\sqrt{3}$$

$$\text{Area of } \Delta ABC = \frac{\sqrt{3}}{4} a^2 = 27\sqrt{3}$$

68. The combined equation of the two lines $ax + by + c = 0$ and $a'x + b'y + c' = 0$ can be written as $(ax + by + c)(a'x + b'y + c') = 0$

The equation of the angle bisectors of the lines represented by the equation $2x^2 + xy - 3y^2 = 0$ is

(1) $3x^2 + 5xy + 2y^2 = 0$

(2) $x^2 - y^2 + 10xy = 0$

(3) $3x^2 + xy - 2y^2 = 0$

(4) $x^2 - y^2 - 10xy = 0$

Official Ans. by NTA (4)

Ans. (4)

Sol.

Equation of the pair of angle bisector for the homogenous equation $ax^2 + 2hxy + by^2 = 0$ is given as

$$\frac{x^2 - y^2}{a - b} = \frac{xy}{h}$$

Here $a = 2, h = \frac{1}{2}$ & $b = -3$

Equation will become

$$\frac{x^2 - y^2}{2 - (-3)} = \frac{xy}{1/2}$$

$$x^2 - y^2 = 10xy$$

$$x^2 - y^2 - 10xy = 0$$

69. The shortest distance between the lines

$$\frac{x-5}{1} = \frac{y-2}{2} = \frac{z-4}{-3} \text{ and } \frac{x+3}{1} = \frac{y+5}{4} = \frac{z-1}{-5} \text{ is}$$

(1) $7\sqrt{3}$

(2) $5\sqrt{3}$

(3) $6\sqrt{3}$

(4) $4\sqrt{3}$

Official Ans. by NTA (3)

Ans. (3)

Sol.

Shortest distance between two lines

$$\frac{x-x_1}{a_1} = \frac{y-y_1}{a_2} = \frac{z-z_1}{a_3} \text{ \&}$$

$$\frac{x-x_2}{b_1} = \frac{y-y_2}{b_2} = \frac{z-z_2}{b_3} \text{ is given as}$$

$$\begin{vmatrix} x_1 - x_2 & y_1 - y_2 & z_1 - z_2 \\ a_1 & a_2 & a_3 \\ b_1 & b_2 & b_3 \end{vmatrix}$$

$$\sqrt{(a_1 b_3 - a_3 b_2)^2 + (a_1 b_3 - a_3 b_1)^2 + (a_1 b_2 - a_2 b_1)^2}$$

$$\begin{vmatrix} 5 - (-3) & 2 - (-5) & 4 - 1 \\ 1 & 2 & -3 \\ 1 & 4 & -5 \end{vmatrix}$$

$$\sqrt{(-10 + 12)^2 + (-5 + 3)^2 + (4 - 2)^2}$$

$$\begin{vmatrix} 8 & 7 & 3 \\ 1 & 2 & -3 \\ 1 & 4 & -5 \end{vmatrix}$$

$$\sqrt{(2)^2 + (2)^2 + (2)^2}$$

$$= \frac{|8(-10 + 12) - 7(-5 + 3) + 3(4 - 2)|}{\sqrt{4 + 4 + 4}}$$

$$= \frac{16 + 14 + 6}{\sqrt{12}} = \frac{36}{\sqrt{12}} = \frac{36}{2\sqrt{3}}$$

$$= \frac{18}{\sqrt{3}} = 6\sqrt{3}$$

70. Let S denote the set of all real values of λ such that the system of equations

$$\lambda x + y + z = 1$$

$$x + \lambda y + z = 1$$

$$x + y + \lambda z = 1$$

is inconsistent, then $\sum_{\lambda \in S} (|\lambda|^2 + |\lambda|)$ is equal to

(1) 2

(2) 12

(3) 4

(4) 6

Official Ans. by NTA (4)

Ans. (4)

Sol.
$$\begin{vmatrix} \lambda & 1 & 1 \\ 1 & \lambda & 1 \\ 1 & 1 & \lambda \end{vmatrix} = 0$$

$$(\lambda + 2) \begin{vmatrix} 1 & 1 & 1 \\ 1 & \lambda & 1 \\ 1 & 1 & \lambda \end{vmatrix} = 0$$

$$(\lambda + 2)[1(\lambda^2 - 1) - 1(\lambda - 1) + (1 - \lambda)] = 0$$

$$(\lambda + 2)(\lambda^2 - 2\lambda + 1) = 0$$

$$(\lambda + 2)(\lambda - 1)^2 = 0 \Rightarrow \lambda = -2, \lambda = 1$$

at $\lambda = 1$ system has infinite solution, for inconsistent $\lambda = -2$

$$\text{so } \sum (|-2|^2 + |-2|) = 6$$

71. Let

$$S = \left\{ x : x \in \mathbb{R} \text{ and } (\sqrt{3} + \sqrt{2})^{x^2-4} + (\sqrt{3} - \sqrt{2})^{x^2-4} = 10 \right\}.$$

Then $n(S)$ is equal to

(1) 2 (2) 4

(3) 6 (4) 0

Official Ans. by NTA (2)

Ans. (2)

Sol. Let $(\sqrt{3} + \sqrt{2})^{x^2-4} = t$

$$t + \frac{1}{t} = 10$$

$$\Rightarrow t = 5 + 2\sqrt{6}, 5 - 2\sqrt{6}$$

$$\Rightarrow (\sqrt{3} + \sqrt{2})^{x^2-4} = 5 + 2\sqrt{6}, 5 - 2\sqrt{6}$$

$$\Rightarrow x^2 - 4 = 2, -2 \text{ or } x^2 = 6, 2$$

$$\Rightarrow x = \pm\sqrt{2}, \pm\sqrt{6}$$

72. Let S be the set of all solutions of the equation

$$\cos^{-1}(2x) - 2\cos^{-1}(\sqrt{1-x^2}) = \pi, x \in \left[-\frac{1}{2}, \frac{1}{2}\right].$$

Then $\sum_{x \in S} 2\sin^{-1}(x^2 - 1)$ is equal to

(1) 0 (2) $-\frac{2\pi}{3}$

(3) $\pi - \sin^{-1}\left(\frac{\sqrt{3}}{4}\right)$ (4) $\pi - 2\sin^{-1}\left(\frac{\sqrt{3}}{4}\right)$

Official Ans. by NTA (2)

Ans. (1)

Sol. $\cos^{-1}(2x) = \pi + 2\cos^{-1}(\sqrt{1-x^2})$

$$\text{LHS} = [0, \pi]$$

For equation to be meaningful

$$\cos^{-1}2x = \pi \text{ and } \cos^{-1}(\sqrt{1-x^2}) = 0$$

$$x = \frac{-1}{2} \text{ and } x = 0$$

which is not possible

$$\therefore x \in \phi$$

$$\text{Now } \Sigma(x) = 0$$

\therefore Sum over empty set is always 0

73. If the center and radius of the circle $\left|\frac{z-2}{z-3}\right| = 2$ are

respectively (α, β) and γ , then $3(\alpha + \beta + \gamma)$ is equal to

(1) 11

(2) 9

(3) 10

(4) 12

Official Ans. by NTA (4)

Ans. (4)

Sol.

$$\sqrt{(x-2)^2 + y^2} = 2\sqrt{(x-3)^2 + y^2}$$

$$= x^2 + y^2 - 4x + 4 = 4x^2 + 4y^2 - 24x + 36$$

$$= 3x^2 + 3y^2 - 20x + 32 = 0$$

$$= x^2 + y^2 - \frac{20}{3}x + \frac{32}{3} = 0$$

$$= (\alpha, \beta) = \left(\frac{10}{3}, 0\right)$$

$$\gamma = \sqrt{\frac{100}{9} - \frac{32}{3}} = \sqrt{\frac{4}{9}} = \frac{2}{3}$$

$$3(\alpha, \beta, \gamma) = 3\left(\frac{10}{3} + \frac{2}{3}\right)$$

$$= 12$$

74. If $y = y(x)$ is the solution curve of the differential equation $\frac{dy}{dx} + y \tan x = x \sec x, 0 \leq x \leq \frac{\pi}{3}$,

$y(0) = 1$, then $y\left(\frac{\pi}{6}\right)$ is equal to

$$(1) \frac{\pi}{12} - \frac{\sqrt{3}}{2} \log_e \left(\frac{2}{e\sqrt{3}} \right)$$

$$(2) \frac{\pi}{12} + \frac{\sqrt{3}}{2} \log_e \left(\frac{2\sqrt{3}}{e} \right)$$

$$(3) \frac{\pi}{12} - \frac{\sqrt{3}}{2} \log_e \left(\frac{2\sqrt{3}}{e} \right)$$

$$(4) \frac{\pi}{12} + \frac{\sqrt{3}}{2} \log_e \left(\frac{2}{e\sqrt{3}} \right)$$

Official Ans. by NTA (1)

Ans. (1)

Sol. Here I.F. = sec x

Then solution of D.E :

$$y(\sec x) = x \tan x - \ln(\sec x) + c$$

$$\text{Given } y(0) = 1 \Rightarrow c = 1$$

$$\therefore y(\sec x) = x \tan x - \ln(\sec x) + 1$$

$$\text{At } x = \frac{\pi}{6}, y = \frac{\pi}{12} + \frac{\sqrt{3}}{2} \ln \frac{\sqrt{3}}{2} + \frac{\sqrt{3}}{2}$$

75. Let R be a relation on \mathbb{R} , given by $R = \{(a, b) : 3a - 3b + \sqrt{7} \text{ is an irrational number}\}$. Then R is

- (1) Reflexive but neither symmetric nor transitive
- (2) Reflexive and transitive but not symmetric
- (3) Reflexive and symmetric but not transitive
- (4) An equivalence relation

Official Ans. by NTA (1)

Ans. (1)

Sol. Check for reflexivity:

As $3(a - a) + \sqrt{7} = \sqrt{7}$ which belongs to relation so relation is reflexive

Check for symmetric:

$$\text{Take } a = \frac{\sqrt{7}}{3}, b = 0$$

Now $(a, b) \in R$ but $(b, a) \notin R$

As $3(b - a) + \sqrt{7} = 0$ which is rational so relation is not symmetric.

Check for Transitivity:

$$\text{Take } (a, b) \text{ as } \left(\frac{\sqrt{7}}{3}, 1 \right)$$

$$\& (b, c) \text{ as } \left(1, \frac{2\sqrt{7}}{3} \right)$$

So now $(a, b) \in R$ & $(b, c) \in R$ but $(a, c) \notin R$ which means relation is not transitive

76. Let the image of the point P(2, -1, 3) in the plane $x + 2y - z = 0$ be Q. Then the distance of the plane $3x + 2y + z + 29 = 0$ from the point Q is

$$(1) \frac{22\sqrt{2}}{7}$$

$$(2) \frac{24\sqrt{2}}{7}$$

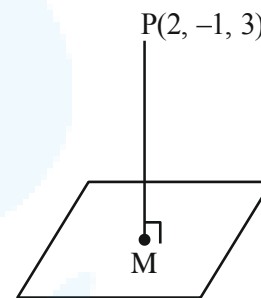
$$(3) 2\sqrt{14}$$

$$(4) 3\sqrt{14}$$

Official Ans. by NTA (4)

Ans. (4)

Sol.



$$\text{eq. of line PM } \frac{x-2}{1} = \frac{y+1}{2} = \frac{z-3}{-1} = \lambda$$

$$\text{any point on line} = (\lambda + 2, 2\lambda - 1, -\lambda + 3)$$

$$\text{for point 'm' } (\lambda + 2) + 2(2\lambda - 1) - (3 - \lambda) = 0$$

$$\lambda = \frac{1}{2}$$

$$\text{Point m } \left(\frac{1}{2} + 2, 2 \times \frac{1}{2} - 1, -\frac{1}{2} + 3 \right)$$

$$= \left(\frac{5}{2}, 0, \frac{5}{2} \right)$$

For Image Q (α, β, γ)

$$\frac{\alpha + 2}{2} = \frac{5}{2}, \frac{\beta - 1}{2} = 0,$$

$$\frac{\gamma + 3}{2} = \frac{5}{2}$$



Q : (3, 1, 2)

$$d = \left| \frac{3(3) + 2(1) + 2 + 29}{\sqrt{3^2 + 2^2 + 1^2}} \right|$$

$$d = \frac{42}{\sqrt{14}} = 3\sqrt{14}$$

77. Let $f(x) = \begin{vmatrix} 1 + \sin^2 x & \cos^2 x & \sin 2x \\ \sin^2 x & 1 + \cos^2 x & \sin 2x \\ \sin^2 x & \cos^2 x & 1 + \sin 2x \end{vmatrix}$,

$x \in \left[\frac{\pi}{6}, \frac{\pi}{3} \right]$. If α & β respectively are the maximum

and the minimum values of f , then

(1) $\beta^2 - 2\sqrt{\alpha} = \frac{19}{4}$

(2) $\beta^2 + 2\sqrt{\alpha} = \frac{19}{4}$

(3) $\alpha^2 - \beta^2 = 4\sqrt{3}$

(4) $\alpha^2 + \beta^2 = \frac{9}{2}$

Official Ans. by NTA (1)

Ans. (1)

Sol.

$C_1 \rightarrow C_1 + C_2 + C_3$

$$f(x) = \begin{vmatrix} 2 + \sin 2x & \cos^2 x & \sin 2x \\ 2 + \sin 2x & 1 + \cos^2 x & \sin 2x \\ 2 + \sin 2x & \cos^2 x & 1 + \sin 2x \end{vmatrix}$$

$$f(x) = (2 + \sin 2x) \begin{vmatrix} 1 & \cos^2 x & \sin 2x \\ 1 & 1 + \cos^2 x & \sin 2x \\ 1 & \cos^2 x & 1 + \sin 2x \end{vmatrix}$$

$R_2 \rightarrow R_2 - R_1$

$R_3 \rightarrow R_3 - R_1$

$$f(x) = (2 + \sin 2x) \begin{vmatrix} 1 & \cos^2 x & \sin 2x \\ 0 & 1 & 0 \\ 0 & 0 & 1 \end{vmatrix}$$

$= (2 + \sin 2x) (1) = 2 + \sin 2x$

$= \sin 2x \in \left[\frac{\sqrt{3}}{2}, 1 \right]$

Hence $2 + \sin 2x \in \left[2 + \frac{\sqrt{3}}{2}, 3 \right]$

78. Let $f(x) = 2x + \tan^{-1}x$ and $g(x) = \log_e(\sqrt{1+x^2} + x)$, $x \in [0, 3]$. Then

(1) There exists $x \in [0, 3]$ such that $f'(x) < g'(x)$

(2) $\max f(x) > \max g(x)$

(3) There exist $0 < x_1 < x_2 < 3$ such that $f(x) < g(x)$, $\forall x \in (x_1, x_2)$

(4) $\min f'(x) = 1 + \max g'(x)$

Official Ans. by NTA (2)

Ans. (2)

Sol.

$f(x) = 2x + \tan^{-1}x$ and $g(x) = \ln(\sqrt{1+x^2} + x)$

and $x \in [0, 3]$

$$g'(x) = \frac{1}{\sqrt{1+x^2}}$$

Now, $0 \leq x \leq 3$

$0 \leq x^2 \leq 9$

$1 \leq 1+x^2 \leq 10$

So, $2 + \frac{1}{10} \leq f'(x) \leq 3$

$\frac{21}{10} \leq f'(x) \leq 3$ and $\frac{1}{\sqrt{10}} \leq g'(x) \leq 1$

option (4) is incorrect

From above, $g'(x) < f'(x) \forall x \in [0, 3]$

Option (1) is incorrect.

$f'(x)$ & $g'(x)$ both positive so $f(x)$ & $g(x)$ both are increasing

So, $\max f(x)$ at $x = 3$ is $6 + \tan^{-1} 3$

$\max g(x)$ at $x = 3$ is $\ln(3 + \sqrt{10})$

And $6 + \tan^{-1} 3 > \ln(3 + \sqrt{10})$

Option (2) is correct

79. The mean and variance of 5 observations are 5 and 8 respectively. If 3 observations are 1, 3, 5, then the sum of cubes of the remaining two observations is

(1) 1072

(2) 1792

(3) 1216

(4) 1456

Official Ans. by NTA (1)

Ans. (1)



Sol. $\frac{1+3+5+a+b}{5} = 5$

$a + b = 16 \dots\dots(1)$

$\sigma^2 = \frac{\sum x_1^2}{5} - \left(\frac{\sum x}{5}\right)^2$

$8 = \frac{1^2 + 3^2 + 5^2 + a^2 + b^2}{5} - 25$

$a^2 + b^2 = 130 \dots\dots(2)$

by (1), (2)

$a = 7, b = 9$

or $a = 9, b = 7$

80. The area enclosed by the closed curve C given by the differential equation $\frac{dy}{dx} + \frac{x+a}{y-2} = 0, y(1) = 0$ is 4π .

Let P and Q be the points of intersection of the curve C and the y-axis. If normals at P and Q on the curve C intersect x-axis at points R and S respectively, then the length of the line segment RS is

- (1) $2\sqrt{3}$
- (2) $\frac{2\sqrt{3}}{3}$
- (3) 2
- (4) $\frac{4\sqrt{3}}{3}$

Official Ans. by NTA (4)

Ans. (4)

Sol. $\frac{dy}{dx} + \frac{x+a}{y-2} = 0$

$\frac{dy}{dx} = \frac{x+a}{2-y}$

$(2-y) dy = (x+a) dx$

$2y \frac{-y}{2} = \frac{x^2}{2} + ax + c$

$a + c = -\frac{1}{2}$ as $y(1) = 0$

$X^2 + y^2 + 2ax - 4y - 1 - 2a = 0$

$\pi r^2 = 4\pi$

$r^2 = 4$

$4 = \sqrt{a^2 + 4 + 1 + 2a}$

$(a+1)^2 = 0$

$P, Q = (0, 2 \pm \sqrt{3})$

Equation of normal at P, Q are $y - 2 = \sqrt{3}(x - 1)$

$y - 2 = -\sqrt{3}(x - 1)$

$R = \left(1 - \frac{2}{\sqrt{3}}, 0\right)$

$S = \left(1 + \frac{2}{\sqrt{3}}, 0\right)$

$RS = \frac{4}{\sqrt{3}} = 4 \frac{\sqrt{3}}{3}$

SECTION-B

81. Let $a_1 = 8, a_2, a_3, \dots, a_n$ be an A.P. If the sum of its first four terms is 50 and the sum of its last four terms is 170, then the product of its middle two terms is _____.

Official Ans. by NTA (754)

Ans. (754)

Sol. $a_1 + a_2 + a_3 + a_4 = 50$

$\Rightarrow 32 + 6d = 50$

$\Rightarrow d = 3$

and, $a_{n-3} + a_{n-2} + a_{n-1} + a_n = 170$

$\Rightarrow 32 + (4n - 10) \cdot 3 = 170$

$\Rightarrow n = 14$

$a_7 = 26, a_8 = 29$

$\Rightarrow a_7 \cdot a_8 = 754$

82. $A(2, 6, 2), B(-4, 0, \lambda), C(2, 3, -1)$ and $D(4, 5, 0), |\lambda| \leq 5$ are the vertices of a quadrilateral ABCD. If its area is 18 square units, then $5 - 6\lambda$ is equal to _____.

Official Ans. by NTA (11)

Ans. (11)

Sol. $A(2, 6, 2) \quad B(-4, 0, \lambda), C(2, 3, -1) \quad D(4, 5, 0)$

Area = $\frac{1}{2} |\overrightarrow{BD} \times \overrightarrow{AC}| = 18$

$\overrightarrow{AC} \times \overrightarrow{BD} = \begin{vmatrix} \hat{i} & \hat{j} & \hat{k} \\ 0 & -3 & -3 \\ 8 & 5 & -\lambda \end{vmatrix}$



$$\begin{aligned}
 &= (3\lambda + 15)\hat{i} - j(-24) + k(-24) \\
 \vec{AC} \times \vec{BD} &= (3\lambda + 15)\hat{i} + 24j - 24k \\
 &= \sqrt{(3\lambda + 15)^2 + (24)^2 + (24)^2} = 36 \\
 &= \lambda^2 + 10\lambda + 9 = 0 \\
 &= \lambda = -1, -9 \\
 |\lambda| \leq 5 &\Rightarrow \lambda = -1 \\
 5 - 6\lambda &= 5 - 6(-1) = 11
 \end{aligned}$$

83. The number of 3-digit numbers, that are divisible by either 2 or 3 but not divisible by 7 is _____.

Official Ans. by NTA (514)

Ans. (514)

Sol. Divisible by 2 \rightarrow 450

Divisible by 3 \rightarrow 300

Divisible by 7 \rightarrow 128

Divisible by 2 & 7 \rightarrow 64

Divisible by 3 & 7 \rightarrow 43

Divisible by 2 & 3 \rightarrow 150

Divisible by 2, 3 & 7 \rightarrow 21

$$\therefore \text{Total numbers} = 450 + 300 - 150 - 64 - 43 + 21 = 514$$

84. The remainder when $19^{200} + 23^{200}$ is divided by 49, is _____.

Official Ans. by NTA (29)

Ans. (29)

Sol. $(21 + 2)^{200} + (21 - 2)^{200}$
 $\Rightarrow 2^{100}C_0 21^{200} + 200C_2 21^{198} \cdot 2^2 + \dots + {}^{200}C_{198} 21^2 \cdot 2^{198} + 2^{200}$
 $\Rightarrow 2[49I_1 + 2^{200}] = 49I_1 + 2^{201}$
 Now, $2^{201} = (8)^{67} = (1 + 7)^{67} = 49I_2 + {}^{67}C_0 {}^{67}C_1 \cdot 7 = 49I_2 + 470 = 49I_2 + 49 \times 9 + 29$
 \therefore Remainder is 29

85. If

$$\int_0^1 (x^{2l} + x^{14} + x^7)(2x^{14} + 3x^7 + 6)^{1/7} dx = \frac{1}{l}(11)^{m/n}$$

where $l, m, n \in \mathbb{N}$, m and n are coprime then $l + m + n$ is equal to _____.

Official Ans. by NTA (63)

Ans. (63)

Sol. $\int (x^{20} + x^{13} + x^6)(2x^{21} + 3x^{14} + 6x^7)^{1/7} dx$

$$2x^{21} + 3x^{14} + 6x^7 = t$$

$$42(x^{20} + x^{13} + x^6) dx = dt$$

$$\frac{1}{42} \int_0^{11} t^{1/7} dt = \left(\frac{t^{8/7}}{8/7} \times \frac{1}{42} \right)_0^{11}$$

$$= \frac{1}{48} \left(t^{8/7} \right)_0^{11} = \frac{1}{48} (11)^{8/7}$$

$$l = 48, m = 8, n = 7$$

$$l + m + n = 63$$

86. If $f(x) = x^2 + g'(1)x + g''(2)$ and

$$g(x) = f(1)x^2 + xf'(x) + f''(x),$$

then the value of $f(4) - g(4)$ is equal to _____.

Official Ans. by NTA (14)

Ans. (14)

Sol. $f(x) = x^2 + g'(1)x + g''(2)$

$$f'(x) = 2x + g'(1)$$

$$f''(x) = 2$$

$$g(x) = f(1)x^2 + x[2x + g'(1)] + 2$$

$$g'(x) = 2f(1)x + 4x + g'(1)$$

$$g''(x) = 2f(1) + 4$$

$$g''(x) = 0$$

$$2f(1) + 4 = 0$$

$$f(1) = -2$$

$$-2 = 1 + g'(1) = g'(1) = -3$$

So, $f'(x) = 2x - 3$

$$f(x) = x^2 - 3x + c$$

$$c = 0$$

$$f(x) = x^2 - 3x$$

$$g(x) = -3x + 2$$

$$f(4) - g(4) = 14$$

87. Let $\vec{v} = \alpha\hat{i} + 2j - 3k$, $\vec{w} = 2\alpha\hat{i} + j - k$, and \vec{u} be a vector such that $|\vec{u}| = \alpha > 0$. If the minimum value

of the scalar triple product $[\vec{u}\vec{v}\vec{w}]$ is $-\alpha\sqrt{3401}$,

and $|\vec{u} \cdot \hat{i}|^2 = \frac{m}{n}$ where m and n are coprime natural

numbers, then $m + n$ is equal to _____.



Official Ans. by NTA (3501)

Allen Ans. (3501)

Sol. $[\vec{u}\vec{v}\vec{w}] = \vec{u} \cdot (\vec{v} \times \vec{w})$

$$\min. (|\vec{u}| |\vec{v} \times \vec{w}| \cos \theta) = -\alpha \sqrt{3401}$$

$$\Rightarrow \cos \theta = -1$$

$$|\vec{u}| = \alpha \text{ (Given)}$$

$$|\vec{v} \times \vec{w}| = \sqrt{3401}$$

$$\vec{v} \times \vec{w} = \begin{vmatrix} \hat{i} & \hat{j} & \hat{k} \\ \alpha & 2 & -3 \\ 2\alpha & 1 & -1 \end{vmatrix}$$

$$\vec{v} \times \vec{w} = \hat{i} - 5\alpha \hat{j} - 3\alpha \hat{k}$$

$$|\vec{v} \times \vec{w}| = \sqrt{1 + 25\alpha^2 + 9\alpha^2} = \sqrt{3401}$$

$$34\alpha^2 = 3400$$

$$\alpha^2 = 100$$

$$\alpha = 10 \quad (\text{as } \alpha > 0)$$

So $\vec{u} = \lambda(\hat{i} - 5\alpha \hat{j} - 3\alpha \hat{k})$

$$|\vec{u}| = \sqrt{\lambda^2 + 25\alpha^2 \lambda^2 + 9\alpha^2 \lambda^2}$$

$$\alpha^2 = \lambda^2(1 + 25\alpha^2 + 9\alpha^2)$$

$$100 = \lambda^2(1 + 34 \times 100)$$

$$\lambda^2 = \frac{100}{3401} = \frac{m}{n}$$

88. The number of words, with or without meaning, that can be formed using all the letters of the word ASSASSINATION so that the vowels occur together, is _____.

Official Ans. by NTA (50400)

Ans. (50400)

Sol. Vowels : A,A,A,I,I,O

Consonants : S,S,S,S,N,N,T

∴ Total number of ways in which vowels come together

$$= \frac{|8}{|4|2} \times \frac{|6}{|3|2} = 50400$$

89. Let A be the area bounded by the curve $y = x|x - 3|$, the x-axis and the ordinates $x = -1$ and $x = 2$. Then 12A is equal to _____.

Official Ans. by NTA (62)

Ans. (62)

Sol. $A = \int_{-1}^0 (x^2 - 3x) dx + \int_0^2 (3x - x^2) dx$

$$\Rightarrow A = \left[\frac{x^3}{3} - \frac{3x^2}{2} \right]_{-1}^0 + \left[\frac{3x^2}{2} - \frac{x^3}{3} \right]_0^2$$

$$\Rightarrow A = \frac{11}{6} + \frac{10}{3} = \frac{31}{6}$$

$$\therefore 12A = 62$$

90. Let $f : \mathbb{R} \rightarrow \mathbb{R}$ be a differentiable function such that $f'(x) + f(x) = \int_0^2 f(t) dt$. If $f(0) = e^{-2}$, then

$2f(0) - f(2)$ is equal to _____.

Official Ans. by NTA (1)

Ans. (1)

Sol. $\frac{dy}{dx} + y = k$

$$y \cdot e^x = k \cdot e^x + c$$

$$f(0) = e^{-2}$$

$$\Rightarrow c = e^{-2} - k$$

$$\therefore y = k + (e^{-2} - k)e^{-x}$$

$$\text{now } k = \int_0^2 (k + (e^{-2} - k)e^{-x}) dx$$

$$\Rightarrow k = e^{-2} - 1$$

$$\therefore y = (e^{-2} - 1) + e^{-x}$$

$$f(2) = 2e^{-2} - 1, f(0) = e^{-2}$$

$$2f(0) - f(2) = 1$$