

FINAL JEE–MAIN EXAMINATION – JULY, 2022

(Held On Tuesday 26th July, 2022)

TIME : 9 : 00 AM to 12 : 00 NOON

CHEMISTRY

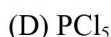
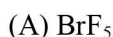
TEST PAPER WITH SOLUTION

SECTION-A

1. Match List - I with List - II.

List - I

(Compound)



List - II

(Shape)

(I) bent

(II) square pyramidal

(III) trigonal bipyramidal

(IV) octahedral

Choose the **correct** answer from the options given below :

(A) (A) - (I), (B) - (II), (C) - (III), (D) - (IV)

(B) (A) - (IV), (B) - (III), (C) - (II), (D) - (I)

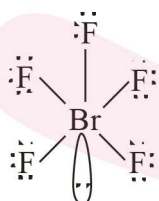
(C) (A) - (II), (B) - (IV), (C) - (I), (D) - (III)

(D) (A) - (III), (B) - (IV), (C) - (II), (D) - (I)

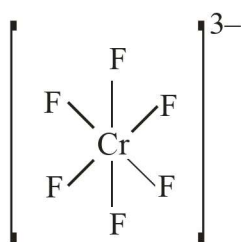
Official Ans. by NTA (C)

Ans. (C)

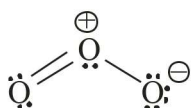
Sol.



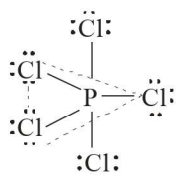
(Square pyramidal)



(Octahedral)



(Bent)

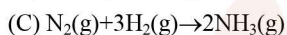
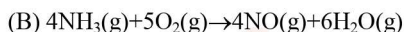
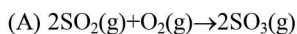


(Trigonal bipyramidal)

2. Match List - I with List - II.

List -I

(Processes/Reactions)



List - II

(Catalyst)

(I) Fe(s)

(II) Pt(s)-Rh(s)

(III) V₂O₅

(IV) Ni(s)

Choose the correct answer from the options given below :

(A) (A) - (III), (B) - (I), (C) - (II), (D) - (IV)

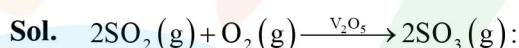
(B) (A) - (III), (B) - (II), (C) - (I), (D) - (IV)

(C) (A) - (IV), (B) - (III), (C) - (I), (D) - (II)

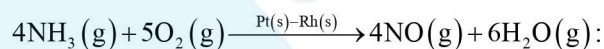
(D) (A) - (IV), (B) - (II), (C) - (III), (D) - (I)

Official Ans. by NTA (B)

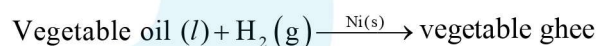
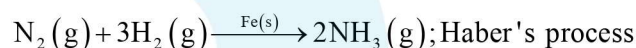
Ans. (B)



contact process



Ostwald's process



: Hydrogenation

3. Given two statements below :

Statement I : In Cl₂ molecule the covalent radius is double of the atomic radius of chlorine.

Statement II : Radius of anionic species is always greater than their parent atomic radius.

Choose the **most appropriate** answer from options given below :

(A) Both Statement I and Statement II are correct.

(B) Both Statement I and Statement II are incorrect.

(C) Statement I is correct but Statement II is incorrect.

(D) Statement I is incorrect but Statement II is correct.

Official Ans. by NTA (D)

Ans. (D)

Sol. In Cl_2 molecule, the covalent radius is half of the internuclear distance, so statement(I) is false.

For the same element, anion has lower effective nuclear charge than atom \Rightarrow so anion is larger than atom. \Rightarrow statement (II) is correct.

4. Refining using liquation method is the most suitable for metals with :

- (A) Low melting point
- (B) High boiling point
- (C) High electrical conductivity
- (D) Less tendency to be soluble in melts than impurities

Official Ans. by NTA (A)

Ans. (A)

Sol. Liquation is used to purify metals having lower melting point than impurities present in them.

5. Which of the following can be used to prevent the decomposition of H_2O_2 ?

- (A) Urea
- (B) Formaldehyde
- (C) Formic acid
- (D) Ethanol

Official Ans. by NTA (A)

Ans. (A)

Sol. Urea acts as stabiliser for H_2O_2 .

6. Reaction of BeCl_2 with LiAlH_4 gives :

- (A) AlCl_3
- (B) BeH_2
- (C) LiH
- (D) LiCl
- (E) BeAlH_4

Choose the **correct** answer from options given below :

- (A) (A), (D) and (E)
- (B) (A), (B) and (D)
- (C) (D) and (E)
- (D) (B), (C) and (D)

Official Ans. by NTA (B)

Ans. (B)

Sol. $2\text{BeCl}_2 + \text{LiAlH}_4 \rightarrow 2\text{BeH}_2 + \text{LiCl} + \text{AlCl}_3$

7. Borazine, also known as inorganic benzene, can be prepared by the reaction of 3-equivalents of "X" with 6-equivalents of "Y". "X" and "Y", respectively are :

- (A) $\text{B}(\text{OH})_3$ and NH_3
- (B) B_2H_6 and NH_3
- (C) B_2H_6 and HN_3
- (D) NH_3 and B_2O_3

Official Ans. by NTA (B)

Ans. (B)

Sol. $3\text{B}_2\text{H}_6 + 6\text{NH}_3 \xrightarrow{\Delta} 2\text{B}_3\text{N}_3\text{H}_6 + 12\text{H}_2$

8. Which of the given reactions is not an example of disproportionation reaction ?

- (A) $2\text{H}_2\text{O}_2 \rightarrow 2\text{H}_2\text{O} + \text{O}_2$
- (B) $2\text{NO}_2 + \text{H}_2\text{O} \rightarrow \text{HNO}_3 + \text{HNO}_2$
- (C) $\text{MnO}_4^- + 4\text{H}^+ + 3\text{e}^- \rightarrow \text{MnO}_2 + 2\text{H}_2\text{O}$
- (D) $3\text{MnO}_4^{2-} + 4\text{H}^+ \rightarrow 2\text{MnO}_4^- + \text{MnO}_2 + 2\text{H}_2\text{O}$

Official Ans. by NTA (C)

Allen Ans. (C)

Sol. $2\text{H}_2\overset{-1}{\text{O}}_2 \longrightarrow 2\text{H}_2\overset{-2}{\text{O}} + \overset{0}{\text{O}}_2$: Disproportionation

$2\text{NO}_2 + \text{H}_2\text{O} \rightarrow \overset{+5}{\text{HNO}_3} + \overset{+3}{\text{HNO}_2}$: Disproportionation

$\text{MnO}_4^- + 4\text{H}^+ + 3\text{e}^- \rightarrow \text{MnO}_2 + 2\text{H}_2\text{O}$: reduction

$3\text{MnO}_4^{2-} + 4\text{H}^+ \rightarrow 2\text{MnO}_4^- + \overset{+4}{\text{MnO}_2} + 2\text{H}_2\text{O}$: Disproportionation

9. The dark purple colour of KMnO_4 disappears in the titration with oxalic acid in acidic medium.

The overall change in the oxidation number of manganese in the reaction is :

- (A) 5
- (B) 1
- (C) 7
- (D) 2

Official Ans. by NTA (A)

Ans. (A)

Sol. In acidic medium,

$\overset{+7}{\text{MnO}_4^-} \rightarrow \text{Mn}^{+2}$

change in ox. no. = 5

10. $\overset{\cdot}{\text{Cl}} + \text{CH}_4 \rightarrow \text{A} + \text{B}$

A and B in the above atmospheric reaction step are

- (A) C_2H_6 and Cl_2
- (B) $\overset{\cdot}{\text{C}}\text{HCl}_2$ and H_2
- (C) $\overset{\cdot}{\text{C}}\text{H}_3$ and HCl
- (D) C_2H_6 and HCl

Official Ans. by NTA (C)

Ans. (C)

Sol. $\overset{\cdot}{\text{Cl}} + \text{CH}_4 \longrightarrow \overset{\cdot}{\text{C}}\text{H}_3 + \text{HCl}$

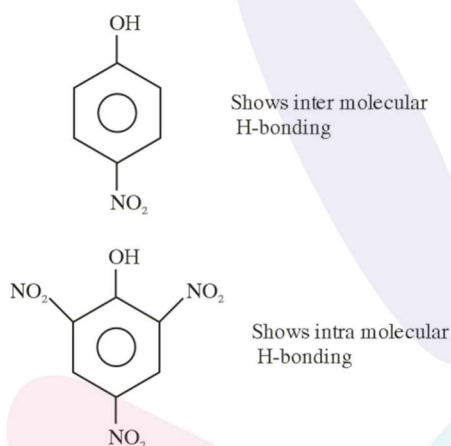
11. Which technique among the following, is most appropriate in separation of a mixture of 100 mg of p-nitrophenol and picric acid ?

- (A) Steam distillation
 (B) 2-5 ft long column of silica gel
 (C) Sublimation
 (D) Preparative TLC (Thin Layer Chromatography)

Official Ans. by NTA (D)

Ans. (D)

Sol.



Solvent polarity has been related to R_f value of nitrocompounds.

100 mg p-nitrophenol and picric acid have different R_f value on silica gel plate

∴ Preparative TLC is best to separate 100 mg of para nitrophenol and picric acid

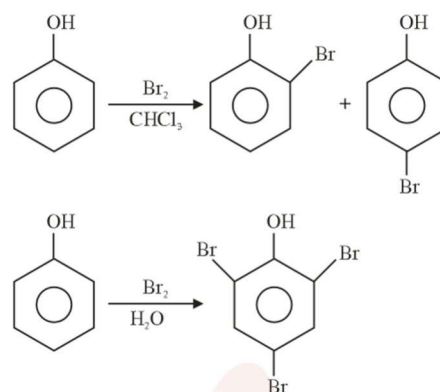
12. The difference in the reaction of phenol with bromine in chloroform and bromine in water medium is due to :

- (A) Hyperconjugation in substrate
 (B) Polarity of solvent
 (C) Free radical formation
 (D) Electromeric effect of the substrate

Official Ans. by NTA (B)

Ans. (B)

Sol.



Difference in reactions is observed due to solvent polarity, which

- (i) Ionizes phenol to make more reactive phenoxide ion
 (ii) Increases electrophilicity of bromine.

13. Which of the following compounds is **not** aromatic?

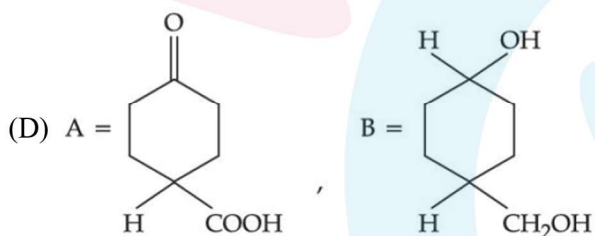
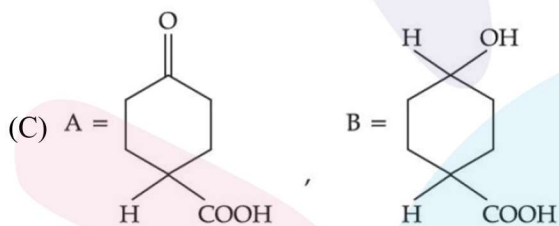
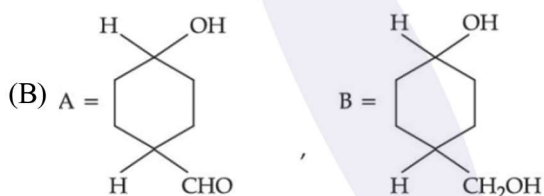
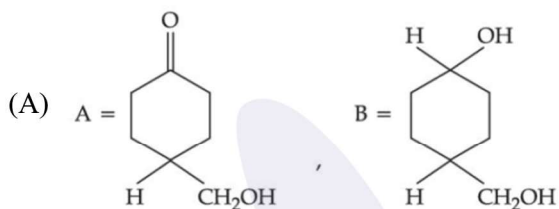
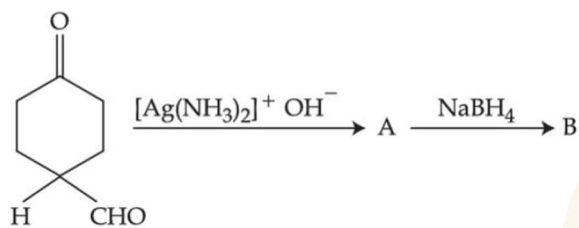
- (A)
- (B)
- (C)
- (D)

Official Ans. by NTA (C)

Ans. (C)

Sol. [10] Annulene, although follow $(4n + 2)\pi$ electron rule, but it is non-aromatic due to its non planar nature. It is nonplanar due to repulsion of C – H bonds present inside the ring.

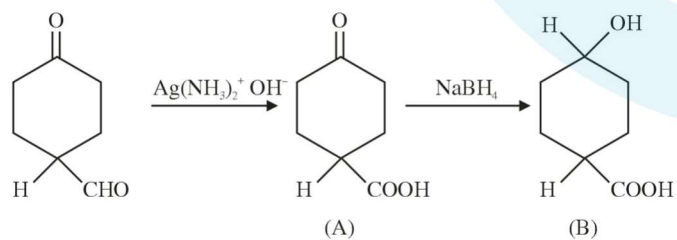
14. The products formed in the following reaction, A and B are



Official Ans. by NTA (C)

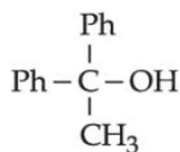
Ans. (C)

Sol.



NaBH₄ does not reduce carboxylic acid.

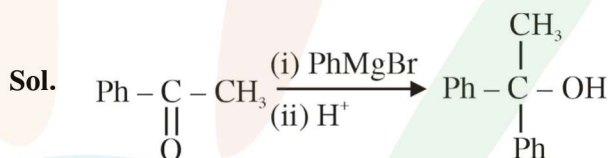
15. Which reactant will give the following alcohol on reaction with one mole of phenyl magnesium bromide (PhMgBr) followed by acidic hydrolysis ?



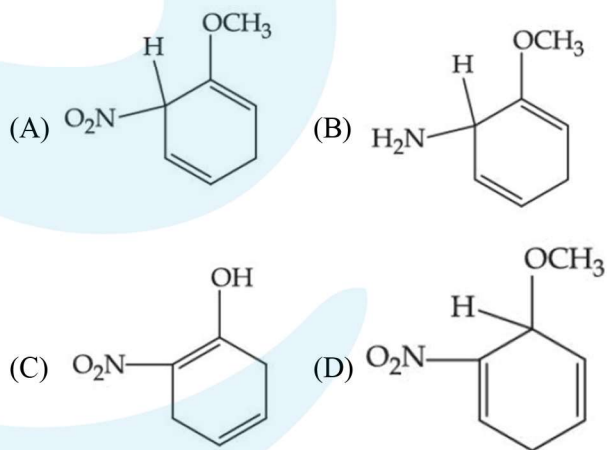
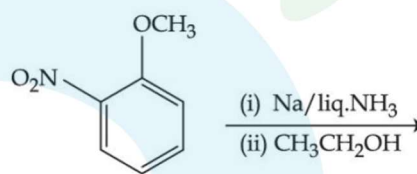
- (A) CH₃-C≡N
 (B) Ph-C≡N
 (C) CH₃-C(=O)-O-Ph
 (D) Ph-C(=O)-CH₃

Official Ans. by NTA (D)

Ans. (D)

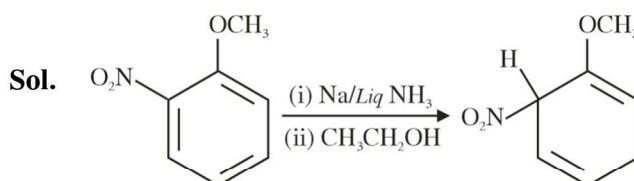


16. The major product of the following reaction is



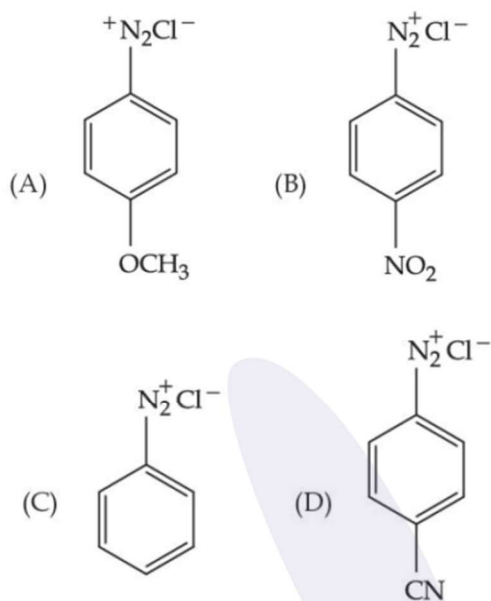
Official Ans. by NTA (A)

Ans. (A)



Given reaction is an example of birch reduction.

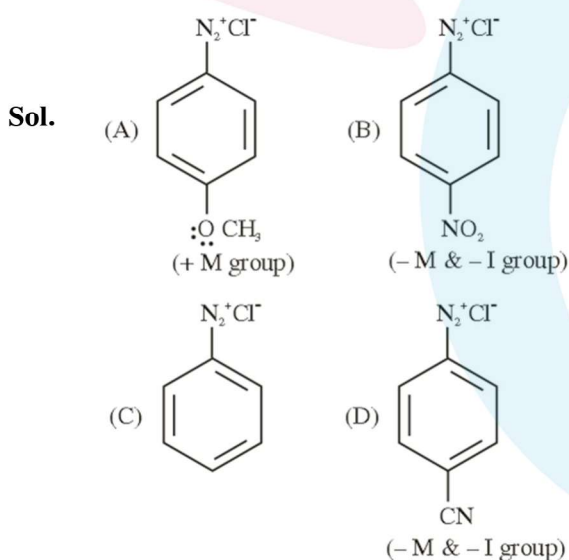
17. The correct stability order of the following diazonium salt is



- (A) (A) > (B) > (C) > (D)
 (B) (A) > (C) > (D) > (B)
 (C) (C) > (A) > (D) > (B)
 (D) (C) > (D) > (B) > (A)

Official Ans. by NTA (B)

Ans. (B)



Since diazonium ion is a cation hence it is stabilized by electron donating groups and destabilized by electron withdrawing group.

Hence Stability order should be A > C > D > B.

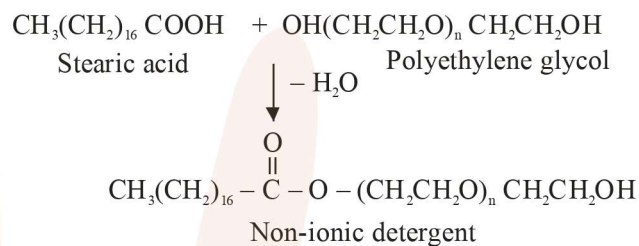
18. Stearic acid and polyethylene glycol react to form which one of the following soap/s detergents ?

- (A) Cationic detergent (B) Soap
 (C) Anionic detergent (D) Non-ionic detergent

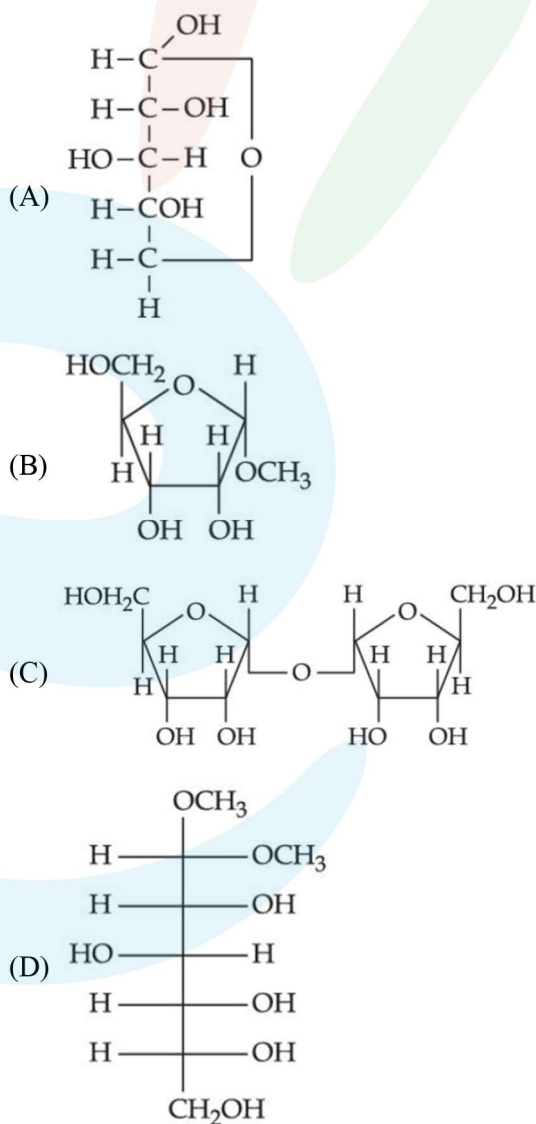
Official Ans. by NTA (D)

Ans. (D)

Sol.



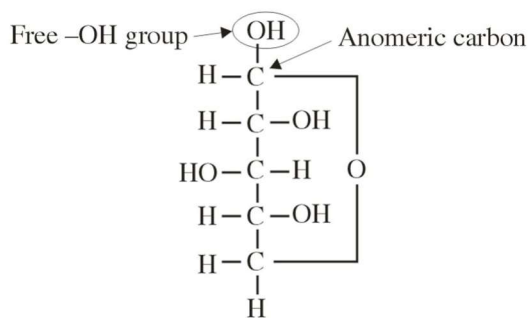
19. Which of the following is reducing sugar?



Official Ans. by NTA (A)

Ans. (A)

Sol. If any sugar is having free -OH group at carbon then it will be a reducing sugar anomeric



20. Given below are two statements : one is labelled as **Assertion (A)** and the other is labelled as **Reason (R)**.

Assertion (A) : Experimental reaction of CH_3Cl with aniline and anhydrous AlCl_3 does **not** give *o* and *p*-methylaniline.

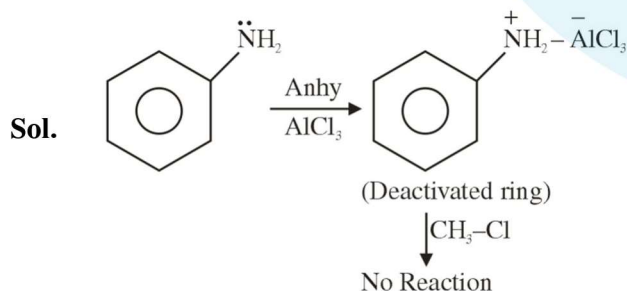
Reason (R) : The $-\text{NH}_2$ group of aniline becomes deactivating because of salt formation with anhydrous AlCl_3 and hence yields *m*-methyl aniline as the product.

In the light of the above statements, choose the most appropriate answer from the options given below :

- (A) Both (A) and (R) are true and (R) is the correct explanation of (A).
- (B) Both (A) and (R) are true but (R) is not the correct explanation of (A).
- (C) (A) is true, but (R) is false.
- (D) (A) is false, but (R) is true.

Official Ans. by NTA (C)

Ans. (C)



Friedel Craft Alkylation does not occur on this deactivated ring.

SECTION-B

1. Chlorophyll extracted from the crushed green leaves was dissolved in water to make 2 L solution of Mg of concentration 48 ppm. The number of atoms of Mg in this solution is $x \times 10^{20}$ atoms. The value of x is _____. (Nearest Integer)

(Given : Atomic mass of Mg is 24 g mol^{-1} , $N_A = 6.02 \times 10^{23} \text{ mol}^{-1}$)

Official Ans. by NTA (24)

Ans. (24)

Sol.
$$\text{ppm} = \frac{W_{\text{Mg}}}{V_{\text{soln}}} \times 10^6 = 48$$

$$\Rightarrow W_{\text{Mg}} = \frac{48 \times 2 \times 1000}{10^6}$$

$$= 48 \times 2 \times 10^{-3} \text{ g}$$

$$n_{\text{Mg}} = \frac{W_{\text{Mg}}}{24} = \frac{48 \times 2 \times 10^{-3}}{24}$$

$$= 4 \times 10^{-3}$$

$$\text{Number of Mg atoms} = 4 \times 10^{-3} \times 6.02 \times 10^{23}$$

$$= 4 \times 6.02 \times 10^{20}$$

$$= 24.08 \times 10^{20}$$

$$\therefore x = 24.08$$

2. A mixture of hydrogen and oxygen contains 40% hydrogen by mass when the pressure is 2.2 bar. The partial pressure of hydrogen is bar. (Nearest Integer)

Official Ans. by NTA (2)

Ans. (2)

Sol. Let $W_{\text{H}_2} = 40 \text{ g} \Rightarrow n_{\text{H}_2} = \frac{40}{2} = 20$

$$W_{\text{O}_2} = 60 \text{ g} \Rightarrow n_{\text{O}_2} = \frac{60}{32} = \frac{15}{8}$$

$$P_{\text{H}_2} = \left(\frac{20}{20 + \frac{15}{8}} \right) \times 2.2$$

$$= \frac{20}{20 + 1.875} \times 2.2$$

$$= \frac{20}{21.875} \times 2.2$$

$$= 2.0114$$

$$\approx 2.01 \text{ bar}$$

ol. If any sugar is having free -OH group at

3. The wavelength of an electron and a neutron will become equal when the velocity of the electron is x times the velocity of neutron. The value of x is _____ . (Nearest Integer)

(Mass of electron is 9.1×10^{-31} kg and mass of neutron is 1.6×10^{-27} kg)

Official Ans. by NTA (1758)

Ans. (1758)

Sol. $v_e = x v_N$

$$\lambda_e = \lambda_N$$

$$\Rightarrow \frac{h}{m_e v_e} = \frac{h}{m_N v_N}$$

$$v_e = \frac{m_N}{m_e} \cdot v_N$$

$$= \frac{1.6 \times 10^{-27}}{9.1 \times 10^{-31}} v_N$$

$$v_e = 1758.24 \times v_N$$

$$\therefore x = 1758.24$$

4. 2.4 g coal is burnt in a bomb calorimeter in excess of oxygen at 298 K and 1 atm pressure.

The temperature of the calorimeter rises from 298 K to 300 K. The enthalpy change during the combustion of coal is $-x$ kJ mol⁻¹. The value of x is _____ . (Nearest Integer)

(Given : Heat capacity of bomb calorimeter 20.0 kJ K⁻¹ . Assume coal to be pure carbon)

Official Ans. by NTA (200)

Ans. (200)



$$Q = C\Delta T = 20 \text{ kJ} \times 2$$

40 kJ heat is released for 2.4 g of C

For 1 mole 'C' : $Q = \frac{40}{2.4} \times 12$

$$= \frac{400}{24} \times 12 = 200 \text{ kJ/mole}$$

$$Q = \Delta E = \Delta H = 200 \text{ kJ} (\because \Delta n_g = 0)$$

$$x = 200$$

5. When 800 mL of 0.5 M nitric acid is heated in a beaker, its volume is reduced to half and 11.5 g of nitric acid is evaporated. The molarity of the remaining nitric acid solution is $x \times 10^{-2}$ M. (Nearest Integer)

(Molar mass of nitric acid is 63 g mol⁻¹)

Official Ans. by NTA (54)

Ans. (54)

Sol. $n_{HNO_3} = 0.5 \times 0.8$

$$= 0.4 \text{ mole}$$

$$(n_{HNO_3})_{\text{remains}} = 0.4 - \frac{11.5}{63}$$

$$= 0.4 - 0.1825$$

$$= 0.2175$$

$$\text{Molarity} = \frac{0.2175}{400} \times 1000$$

$$= \frac{0.2175}{0.4}$$

$$= 0.5437 \text{ mole/lit.}$$

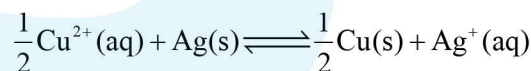
$$\approx 0.54 \text{ mole/lit.}$$

$$= 54 \times 10^{-2} \text{ mol/lit.}$$

6. At 298 K, the equilibrium constant is 2×10^{15} for the reaction :



The equilibrium constant for the reaction



is $x \times 10^{-8}$. The value of x is _____ .

(Nearest Integer)

Official Ans. by NTA (2)

Ans. (2)

Sol. $K'_{eq} = \frac{1}{\sqrt{K_{eq}}} = \frac{1}{\sqrt{2 \times 10^{15}}} = x \times 10^{-8}$

$$\Rightarrow \frac{1}{\sqrt{20}} \times \frac{1}{10^7} = x \times 10^{-8}$$

$$\Rightarrow \frac{1}{\sqrt{20}} \times 10^{-7} = x \times 10^{-8}$$

$$\frac{10}{\sqrt{20}} = x$$

$$\Rightarrow x = \frac{\sqrt{10}}{\sqrt{2}} = \sqrt{5} = 2.236$$

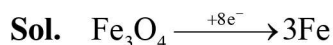
$$\approx 2.24$$

7. The amount of charge in F (Faraday) required to obtain one mole of iron from Fe_3O_4 is _____.

(Nearest Integer)

Official Ans. by NTA (8)

Ans. (3)



Charge for 1 mole Fe = $\frac{8}{3} F$

= 2.67 F

8. For a reaction $A \rightarrow 2B + C$ the half lives are 100 s and 50 s when the concentration of reactant A is 0.5 and 1.0 mol L^{-1} respectively. The order of the reaction is _____. (Nearest Integer)

Official Ans. by NTA (2)

Ans. (2)

Sol. $t_{\frac{1}{2}} \propto \frac{1}{[A_0]^{n-1}}$

$$[100] \propto \frac{1}{(0.5)^{n-1}}$$

$$(50) \propto \frac{1}{(1)^{n-1}}$$

$$[2]^1 = \left[\frac{1}{0.5} \right]^{n-1}$$

$$[2]^1 = [2]^{n-1}$$

$$n - 1 = 1$$

$$n = 2$$


$$\text{order} = 2$$

9. The difference between spin only magnetic moment values of $[\text{Co}(\text{H}_2\text{O})_6]\text{Cl}_2$ and $[\text{Cr}(\text{H}_2\text{O})_6]\text{Cl}_3$ is _____.

Official Ans. by NTA (0)

Ans. (0)

Sol. $[\text{Co}(\text{H}_2\text{O})_6]^{2+}$



number of unpaired $e^- = 3$

$$\mu = \sqrt{15} \text{BM}$$

$[\text{Cr}(\text{H}_2\text{O})_6]^{3+}$



number of unpaired $e^- = 3$

$$\mu = \sqrt{15} \text{BM}$$

Difference in spin only magnetic moment = 0

10. In the presence of sunlight, benzene reacts with Cl_2 to give product, X. The number of hydrogens in X is _____.

Official Ans. by NTA (6)

Ans. (6)

